

# Warm up



a beetle has  
bilateral symmetry

a coral polyp has  
radial symmetry


a sponge has  
no symmetry

Classify each animal below as having **bilateral symmetry (B)**, **radial symmetry (R)** or as **asymmetrical (A)**.



butterfly

fiddler crab



sponge

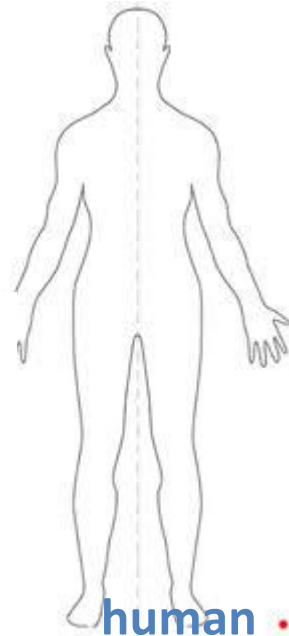



sand dollar

dog



octopus



human